

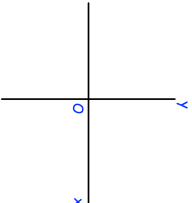


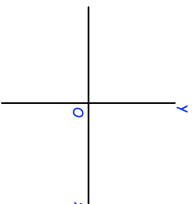


30th April	Corbettmaths 
Estimate $\sqrt[3]{120}$	
 <p>Show this information on a distance-time graph.</p>	<p>Teddy leaves home at 13:00 He drives at an average speed of 60km/h for 2½ hours. Teddy stops for 30 minutes. He then drives home at an average speed of 50km/h</p> <p>A film starts at 18:45</p> <p>Does Teddy get home in time for the start? Explain your answer.</p>
<p>Sketch</p> $y = x^3 + 1$	
Make x the subject of $p = 3(y + 2x)^2$	

30th April	Corbettmaths 
Estimate $\sqrt[3]{120}$	
 <p>Show this information on a distance-time graph.</p>	<p>Teddy leaves home at 13:00 He drives at an average speed of 60km/h for 2½ hours. Teddy stops for 30 minutes. He then drives home at an average speed of 50km/h</p> <p>A film starts at 18:45</p> <p>Does Teddy get home in time for the start? Explain your answer.</p>
<p>Sketch</p> $y = x^3 + 1$	
Make x the subject of $p = 3(y + 2x)^2$	