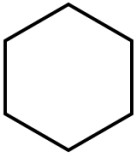



Name: _____

5-a-day

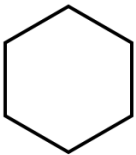

Numeracy

11th April 	Name this shape Corbettmaths
Benny is saving for a guitar that costs £105 He saves £15 each week. How many weeks will it take Benny to save for the guitar?	
8 10 12 13 20 23 26 Which two numbers have a sum of 43?	Which two numbers have a product of 240?
Draw a line perpendicular to AB	A _____ B _____
Write down the next three terms 87.8 88.1 88.4 _____	Write down the next three terms 95 60 25 _____

Name: _____

5-a-day

Numeracy

11th April 	Name this shape Corbettmaths
Benny is saving for a guitar that costs £105 He saves £15 each week. How many weeks will it take Benny to save for the guitar?	
8 10 12 13 20 23 26 Which two numbers have a sum of 43?	Which two numbers have a product of 240?
Draw a line perpendicular to AB	A _____ B _____
Write down the next three terms 87.8 88.1 88.4 _____	Write down the next three terms 95 60 25 _____