

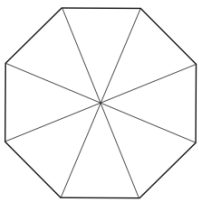
Name: _____

5-a-day

Numeracy

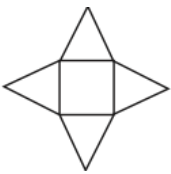
12th April


Corbettmaths



Shade in 75% of this shape

This is the net of which solid?



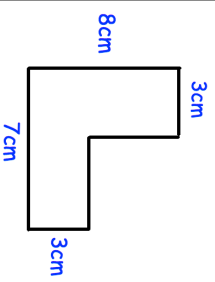
How many edges does that solid have?

Write down all the factors of 33

Work out

$$(-3)^2$$

Find the perimeter of the shape shown.



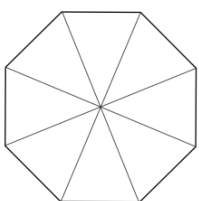
Name: _____

5-a-day

Numeracy

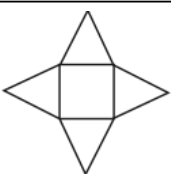
12th April


Corbettmaths



Shade in 75% of this shape

This is the net of which solid?



How many edges does that solid have?

Write down all the factors of 33

Work out

$$(-3)^2$$

Find the perimeter of the shape shown.

