

Name: _____

5-a-day

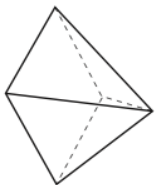
Numeracy



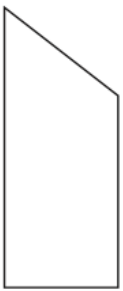
25th April



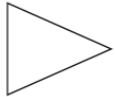
Name this shape _____



Name this shape _____



Name this shape _____



Name this shape (full name)

Write two thousand three hundred and six in figures

Write 3948 to the nearest 100.

There are 6 pens in a packet.

Natalie has 17 packets of pens.

How many pens does she have?

Work out the difference between 4 squared and 8 squared.

Name: _____

5-a-day

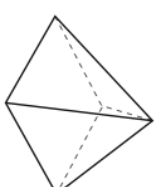
Numeracy



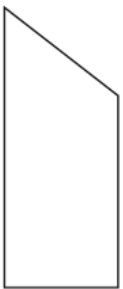
25th April



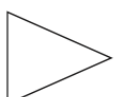
Name this shape _____



Name this shape _____



Name this shape _____



Name this shape (full name)

Write two thousand three hundred and six in figures

Write 3948 to the nearest 100.

There are 6 pens in a packet.

Natalie has 17 packets of pens.

How many pens does she have?

Work out the difference between 4 squared and 8 squared.