

Name: _____

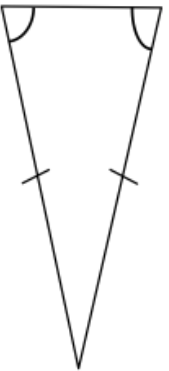
5-a-day

Numeracy

4th April



What is the special name for this type of triangle?



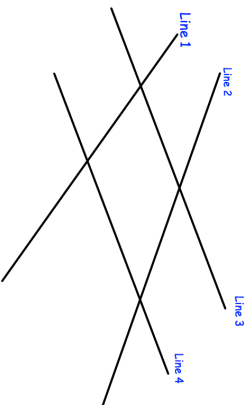
A film lasts 80 minutes.
It ends at 17:10

What time did the film begin?

Here is a number sequence
2, 4, 8, 16, 32, ...

Write down the next number in the sequence

Which two lines are parallel?



Measure the length of Line 1

Name: _____

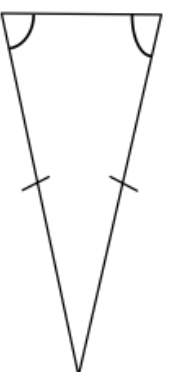
5-a-day

Numeracy

4th April



What is the special name for this type of triangle?



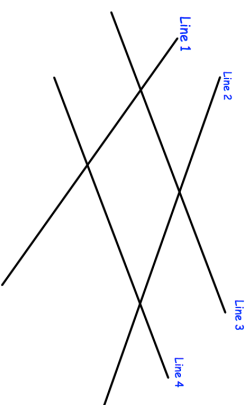
A film lasts 80 minutes.
It ends at 17:10

What time did the film begin?

Here is a number sequence
2, 4, 8, 16, 32, ...

Write down the next number in the sequence

Which two lines are parallel?



Measure the length of Line 1