

Name: _____

5-a-day

Numeracy

6th April

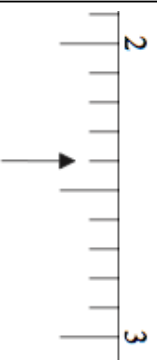
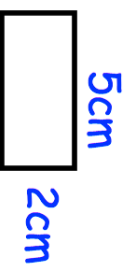
Work out $2300 + 1700$



Write your answer in words.

$$\square - 14 = 89$$

Calculate the perimeter



What number is the arrow pointing to?



What number is the arrow pointing to?

Name: _____

5-a-day

Numeracy

6th April

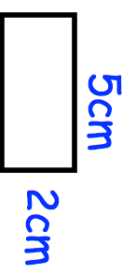
Work out $2300 + 1700$



Write your answer in words.

$$\square - 14 = 89$$

Calculate the perimeter



What number is the arrow pointing to?



What number is the arrow pointing to?