
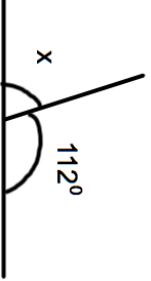

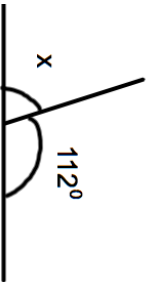


7th April		Corbettmaths						
	What fraction of this shape is shaded?							
	What percentage is not shaded?							
$670 \div \square = 335$								
	Find x							
Jamie buys two teas and one hot chocolate. How much does he pay?	<table border="1" data-bbox="491 582 646 974"> <tr> <td>Tea</td> <td>£1.30</td> </tr> <tr> <td>Coffee</td> <td>£1.70</td> </tr> <tr> <td>Hot Chocolate</td> <td>£0.95</td> </tr> </table>	Tea	£1.30	Coffee	£1.70	Hot Chocolate	£0.95	
Tea	£1.30							
Coffee	£1.70							
Hot Chocolate	£0.95							
He pays with a £10 note. How much change should he get?								

7th April		Corbettmaths						
	What fraction of this shape is shaded?							
	What percentage is not shaded?							
$670 \div \square = 335$								
	Find x							
Jamie buys two teas and one hot chocolate. How much does he pay?	<table border="1" data-bbox="491 1673 646 2065"> <tr> <td>Tea</td> <td>£1.30</td> </tr> <tr> <td>Coffee</td> <td>£1.70</td> </tr> <tr> <td>Hot Chocolate</td> <td>£0.95</td> </tr> </table>	Tea	£1.30	Coffee	£1.70	Hot Chocolate	£0.95	
Tea	£1.30							
Coffee	£1.70							
Hot Chocolate	£0.95							
He pays with a £10 note. How much change should he get?								