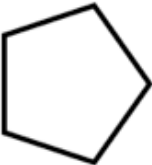
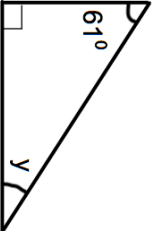


Name: _____

5-a-day

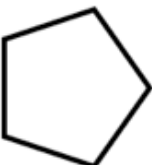
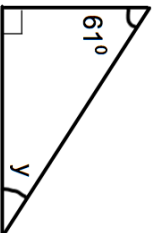
Numeracy

<p>8th April</p> 	<p>Name this shape _____</p> <p>Corbettmaths</p>
<p>Here are four numbers 15 30 32 40</p>	<p>Give a reason why 32 is the odd one out</p>
<p>Oliver is paid £9 an hour. Over a weekend, Oliver earns a total of £108. How many hours did Oliver work?</p>	
	<p>Find y</p>
<p>Office Hours 9am to 11:30am 2pm to 4:30pm</p>	<p>The office is open Monday to Friday How many hours is the office open each week?</p>

Name: _____

5-a-day

Numeracy

<p>8th April</p> 	<p>Name this shape _____</p> <p>Corbettmaths</p>
<p>Here are four numbers 15 30 32 40</p>	<p>Give a reason why 32 is the odd one out</p>
<p>Oliver is paid £9 an hour. Over a weekend, Oliver earns a total of £108. How many hours did Oliver work?</p>	
	<p>Find y</p>
<p>Office Hours 9am to 11:30am 2pm to 4:30pm</p>	<p>The office is open Monday to Friday How many hours is the office open each week?</p>