



Name: _____

5-a-day

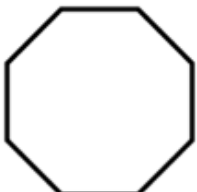

Numeracy

9th April	Name this shape _____	Corbettmaths
		
Georgina has 100 counters. 17 are white 29 are purple The rest are silver	How many counters are silver?	
$24p + 30p + 63p =$ Give your answer in pounds		
1 litre costs 60p 3 litres costs?	$\frac{1}{4}$ litre costs?	
 A tin weighs 300g How many more grams than 1kg, is the mass of four tins?		

Name: _____

5-a-day

Numeracy

9th April	Name this shape _____	Corbettmaths
		
Georgina has 100 counters. 17 are white 29 are purple The rest are silver	How many counters are silver?	
$24p + 30p + 63p =$ Give your answer in pounds		
1 litre costs 60p 3 litres costs?	$\frac{1}{4}$ litre costs?	
 A tin weighs 300g How many more grams than 1kg, is the mass of four tins?		