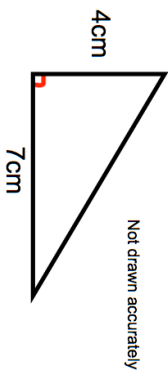
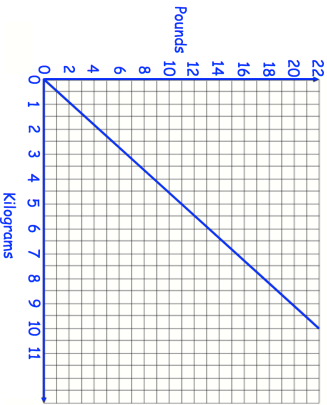
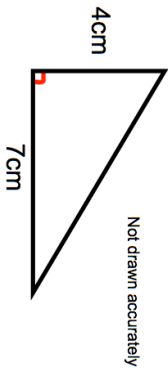
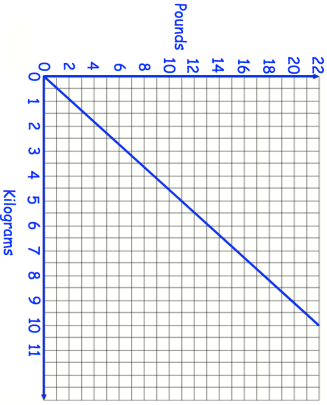


13th February Work out $\frac{5}{7}$ of 168 Corbettmaths	
 <p>4cm 7cm Not drawn accurately</p>	Find the area of the triangle.
 <p>22 20 18 16 14 12 10 8 6 4 2 0 Pounds 0 1 2 3 4 5 6 7 8 9 10 11 Kilograms</p>	Using the graph, convert 5 kilograms to pounds.
Find the nth term of 8 12 16 20 ...	Using the graph, convert 8 pounds to kilograms.
Find the 100th term.	

13th February Work out $\frac{5}{7}$ of 168 Corbettmaths	
 <p>4cm 7cm Not drawn accurately</p>	Find the area of the triangle.
 <p>22 20 18 16 14 12 10 8 6 4 2 0 Pounds 0 1 2 3 4 5 6 7 8 9 10 11 Kilograms</p>	Using the graph, convert 5 kilograms to pounds.
Find the nth term of 8 12 16 20 ...	Using the graph, convert 8 pounds to kilograms.
Find the 100th term.	