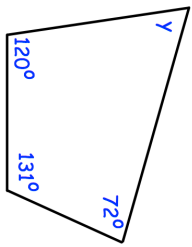
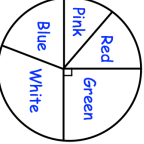
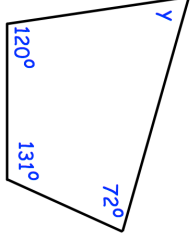
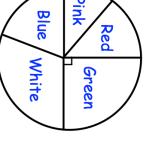


<p>17th February</p> <p style="text-align: right;">Corbettmaths</p> 	Find y												
<p>Convert 0.124 to a fraction. Give your answer in its simplest form.</p>	<p>Convert $\frac{5}{8}$ to a decimal.</p>												
<p>Find the lowest common multiple of 12 and 20.</p>	<p>How many green beads are there?</p>												
 <p>he pie chart shows the colours of 32 beads.</p> <table border="1" data-bbox="229 152 399 398"> <thead> <tr> <th>Number of sweets</th> <th>Frequency</th> </tr> </thead> <tbody> <tr><td>23</td><td>1</td></tr> <tr><td>24</td><td>4</td></tr> <tr><td>25</td><td>9</td></tr> <tr><td>26</td><td>3</td></tr> <tr><td>27</td><td>3</td></tr> </tbody> </table>	Number of sweets	Frequency	23	1	24	4	25	9	26	3	27	3	<p>Calculate the mean.</p>
Number of sweets	Frequency												
23	1												
24	4												
25	9												
26	3												
27	3												

<p>17th February</p> <p style="text-align: right;">Corbettmaths</p> 	Find y												
<p>Convert 0.124 to a fraction. Give your answer in its simplest form.</p>	<p>Convert $\frac{5}{8}$ to a decimal.</p>												
<p>Find the lowest common multiple of 12 and 20.</p>	<p>How many green beads are there?</p>												
 <p>he pie chart shows the colours of 32 beads.</p> <table border="1" data-bbox="229 1258 399 1505"> <thead> <tr> <th>Number of sweets</th> <th>Frequency</th> </tr> </thead> <tbody> <tr><td>23</td><td>1</td></tr> <tr><td>24</td><td>4</td></tr> <tr><td>25</td><td>9</td></tr> <tr><td>26</td><td>3</td></tr> <tr><td>27</td><td>3</td></tr> </tbody> </table>	Number of sweets	Frequency	23	1	24	4	25	9	26	3	27	3	<p>Calculate the mean.</p>
Number of sweets	Frequency												
23	1												
24	4												
25	9												
26	3												
27	3												