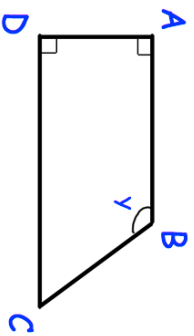


22nd February



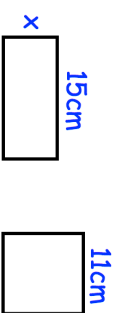
Simplify $3a + 2w - 5a - 9w$

$$\frac{2}{3} \div \frac{8}{11}$$



Fill in the spaces from the list of words below.

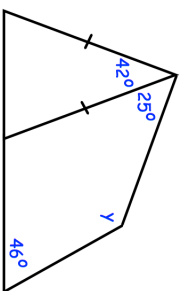
- obtuse perpendicular reflex
- acute parallel
- AB is to AD.
- DC is to AB.



The perimeter of the rectangle and the square are the same.

Find the width of the rectangle, x.

Find y

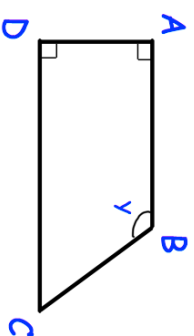


22nd February



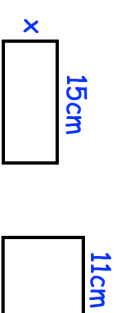
Simplify $3a + 2w - 5a - 9w$

$$\frac{2}{3} \div \frac{8}{11}$$



Fill in the spaces from the list of words below.

- obtuse perpendicular reflex
- acute parallel
- AB is to AD.
- DC is to AB.



The perimeter of the rectangle and the square are the same.

Find the width of the rectangle, x.

Find y

