

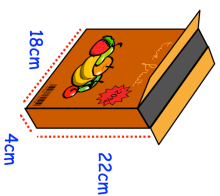
Name: _____

5-a-day

Foundation


25th February

Corbettmaths



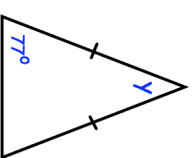
Find the volume of the box

Draw $y = 8$



Draw $y = 3x$

Find the size of the angle marked y



How much does each person pay?

Kyle is organising a charity concert at school.
The concert is sold out.
The hall holds 28 rows of 16 seats.
Each person will pay the same amount of money.

Kyle raises £1344 in total.

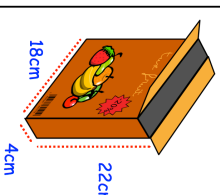
Name: _____

5-a-day

Foundation


25th February

Corbettmaths



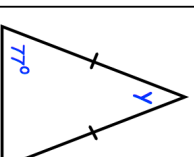
Find the volume of the box

Draw $y = 8$



Draw $y = 3x$

Find the size of the angle marked y



How much does each person pay?

Kyle is organising a charity concert at school.
The concert is sold out.
The hall holds 28 rows of 16 seats.
Each person will pay the same amount of money.

Kyle raises £1344 in total.