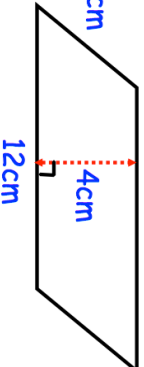
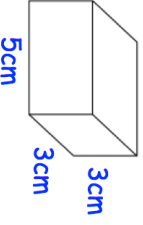
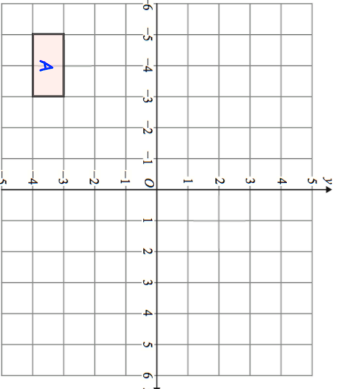
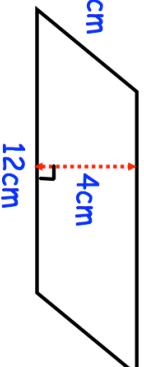
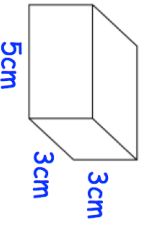
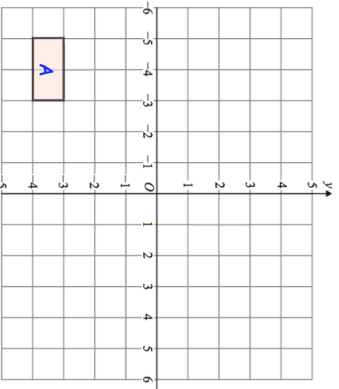


<p>26th February</p> 	<p>Corbettmaths</p> <p>Find the area of the parallelogram</p>
 <p>Calculate the volume of the cuboid</p>	
<p>Expand $6(w + 9)$</p>	<p>Expand $5(4y - 3)$</p>
	<p>Translate rectangle A by $\begin{pmatrix} 7 \\ 5 \end{pmatrix}$</p> <p>Label the new shape B.</p> <p>Reflect rectangle A using the x-axis as the mirror line.</p>

<p>26th February</p> 	<p>Corbettmaths</p> <p>Find the area of the parallelogram</p>
 <p>Calculate the volume of the cuboid</p>	
<p>Expand $6(w + 9)$</p>	<p>Expand $5(4y - 3)$</p>
	<p>Translate rectangle A by $\begin{pmatrix} 7 \\ 5 \end{pmatrix}$</p> <p>Label the new shape B.</p> <p>Reflect rectangle A using the x-axis as the mirror line.</p>