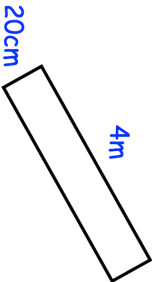




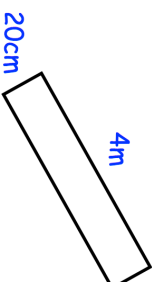






<p>27th February</p> 	<p>Work out the perimeter. _____</p> <p>Give your answer in centimetres.</p> <p style="text-align: right;"> Corbettmaths</p>
<p>Solve $x + 5 = 7$</p>	<p>Solve $9y - 4 = 41$</p>
<p>A  B  C </p> <p>350cm^3 400 ml 0.08 Litres</p>	<p>List the containers in order, from least water to greatest water.</p>
<p>Make w the subject of:</p> $w - a = g$	
<p>The timetable for a flight from London to Beijing is shown.</p> <p>Departure from London 5 August 20:25 Arrival in Beijing 6 August 13:10</p> <p>When it is 1pm in London, it is 8pm in Beijing.</p>	<p>How long should the journey take? Give your answer in hours and minutes.</p>

<p>27th February</p> 	<p>Work out the perimeter. _____</p> <p>Give your answer in centimetres.</p> <p style="text-align: right;"> Corbettmaths</p>
<p>Solve $x + 5 = 7$</p>	<p>Solve $9y - 4 = 41$</p>
<p>A  B  C </p> <p>350cm^3 400 ml 0.08 Litres</p>	<p>List the containers in order, from least water to greatest water.</p>
<p>Make w the subject of:</p> $w - a = g$	
<p>The timetable for a flight from London to Beijing is shown.</p> <p>Departure from London 5 August 20:25 Arrival in Beijing 6 August 13:10</p> <p>When it is 1pm in London, it is 8pm in Beijing.</p>	<p>How long should the journey take? Give your answer in hours and minutes.</p>