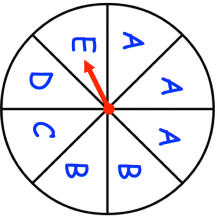
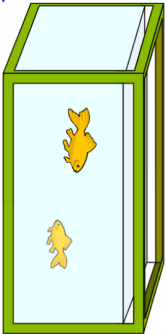
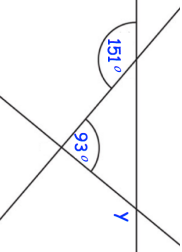
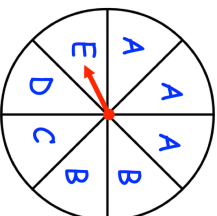

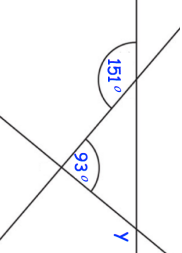


<p><b>28th February</b></p>  <p>Corbettmaths</p> <p>A fair spinner has eight equal sections. What is the probability that the arrow lands on a B or a C?</p>	
<p>Arrange in order, starting with the smallest</p> <p><math>3^2</math> <math>\sqrt{100}</math> <math>4^2</math> <math>\sqrt{80}</math></p>	
<p>10cm</p> <p>15cm</p>  <p>60cm</p> <p>There are red sweets and yellow sweets in a bag. <math>\frac{5}{6}</math> of the sweets are yellow. There are 20 yellow sweets in the bag. Work out how many sweets in total are in the bag.</p>	Find the volume of the fish tank
<p>Above are 3 straight lines</p> 	Find the size of angle y.

<p><b>28th February</b></p>  <p>Corbettmaths</p> <p>A fair spinner has eight equal sections. What is the probability that the arrow lands on a B or a C?</p>	
<p>Arrange in order, starting with the smallest</p> <p><math>3^2</math> <math>\sqrt{100}</math> <math>4^2</math> <math>\sqrt{80}</math></p>	
<p>10cm</p> <p>15cm</p>  <p>60cm</p> <p>There are red sweets and yellow sweets in a bag. <math>\frac{5}{6}</math> of the sweets are yellow. There are 20 yellow sweets in the bag. Work out how many sweets in total are in the bag.</p>	Find the volume of the fish tank
<p>Above are 3 straight lines</p> 	Find the size of angle y.