

Name: \_\_\_\_\_

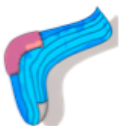
5-a-day

Foundation

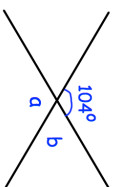
29th February

Mary has 7 blue socks and 3 red socks.

If she selects one sock at random, what is the probability she selects a red sock?



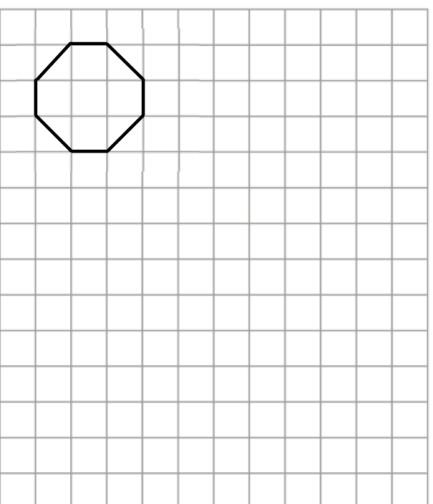
Corbettmaths



a =                      b =

Joey thinks the answer to  $16 + 4 \times 2$  is 40.  
Albert thinks the answer to  $16 + 4 \times 2$  is 24.

Who is correct?  
Explain your answer.



Enlarge the octagon by scale factor 2

Name: \_\_\_\_\_

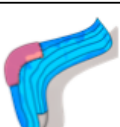
5-a-day

Foundation

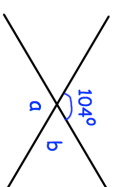
29th February

Mary has 7 blue socks and 3 red socks.

If she selects one sock at random, what is the probability she selects a red sock?



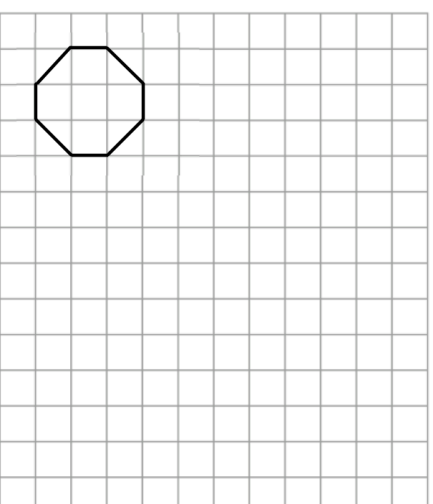
Corbettmaths



a =                      b =

Joey thinks the answer to  $16 + 4 \times 2$  is 40.  
Albert thinks the answer to  $16 + 4 \times 2$  is 24.

Who is correct?  
Explain your answer.



Enlarge the octagon by scale factor 2