
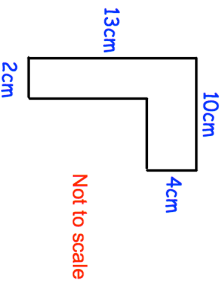

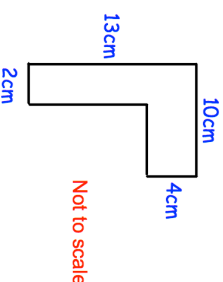


3rd February	Corbettmaths 
<h1>0.17</h1> Write as a percentage	Write as a fraction
Work out 0.3×0.2	Work out $5.18 \div 7$
	Calculate the area of the shape
<p>Four numbers have:</p> <ul style="list-style-type: none"> - a mode of 4 - a range of 7 - a median of 4 <p>List what the four numbers could be</p>	
<p>A plane travels at an average speed of 550km/h. The plane travels 4400 kilometres. Calculate how long the plane journey took.</p>	

3rd February	Corbettmaths 
<h1>0.17</h1> Write as a percentage	Write as a fraction
Work out 0.3×0.2	Work out $5.18 \div 7$
	Calculate the area of the shape
<p>Four numbers have:</p> <ul style="list-style-type: none"> - a mode of 4 - a range of 7 - a median of 4 <p>List what the four numbers could be</p>	
<p>A plane travels at an average speed of 550km/h. The plane travels 4400 kilometres. Calculate how long the plane journey took.</p>	