

Name: _____

5-a-day

Foundation

5th February



Corbettmaths

a) What is 10% of £30

c) What is 15% of £30

b) What is 5% of £30

d) What is 95% of £30

Entry - £1.20

230 people paid entrance.

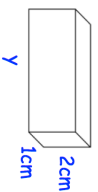
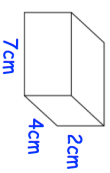
How much money is that in total?

Simplify:

$$w + 2 + 4w + 10$$

Simplify:

$$3w + 6 + w - 4$$



Find y

Both cuboids have the same volume.

Write 50 as a product of primes

Name: _____

5-a-day

Foundation

5th February



Corbettmaths

a) What is 10% of £30

c) What is 15% of £30

b) What is 5% of £30

d) What is 95% of £30

Entry - £1.20

230 people paid entrance.

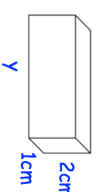
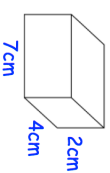
How much money is that in total?

Simplify:

$$w + 2 + 4w + 10$$

Simplify:

$$3w + 6 + w - 4$$



Find y

Both cuboids have the same volume.

Write 50 as a product of primes