
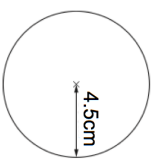


Name: _____

5-a-day

Foundation


<p>9th February</p> <p style="text-align: right;">Corbettmaths </p> <p>Mary wins £400. She gives 50% to her mother. Mary gives 20% to her sister. She keeps the rest.</p> <p style="text-align: right;">Mother £..... Sister £..... Mary £.....</p> <p>Work out how much each person receives.</p> <p style="text-align: right;">Mary £.....</p>																															
<p>Solve $8w + 20 = 4$</p>																															
<table border="1"> <tr> <td>Belfast City Centre, Europa Buscentre</td> <td>1850</td> <td>1930</td> </tr> <tr> <td>Belfast City Centre, Albert Clock Queens Square</td> <td>1820</td> <td>1852</td> </tr> <tr> <td>Belfast City Centre, Laganside Buscentre</td> <td>1832</td> <td>1905</td> </tr> <tr> <td>Holywood, Cedar Grove</td> <td>1845</td> <td>1918</td> </tr> <tr> <td>Cultra, Health Centre</td> <td>1849</td> <td>1922</td> </tr> <tr> <td>Crawfordsburn, Transport Museum</td> <td>1928</td> <td>2002</td> </tr> <tr> <td>Crawfordsburn, Crawfordsburn Inn</td> <td>1933</td> <td></td> </tr> <tr> <td>North Down, Rathmore Shops</td> <td>1855</td> <td>2008</td> </tr> <tr> <td>North Down, Kilcooley Terminus</td> <td>1910</td> <td>1940</td> </tr> <tr> <td>Bangor, Buscentre</td> <td>2020</td> <td></td> </tr> </table> <p>Colin gets on the bus at Europa Buscentre at 18:50. He travels to Crawfordsburn. How long does his journey last?</p>		Belfast City Centre, Europa Buscentre	1850	1930	Belfast City Centre, Albert Clock Queens Square	1820	1852	Belfast City Centre, Laganside Buscentre	1832	1905	Holywood, Cedar Grove	1845	1918	Cultra, Health Centre	1849	1922	Crawfordsburn, Transport Museum	1928	2002	Crawfordsburn, Crawfordsburn Inn	1933		North Down, Rathmore Shops	1855	2008	North Down, Kilcooley Terminus	1910	1940	Bangor, Buscentre	2020	
Belfast City Centre, Europa Buscentre	1850	1930																													
Belfast City Centre, Albert Clock Queens Square	1820	1852																													
Belfast City Centre, Laganside Buscentre	1832	1905																													
Holywood, Cedar Grove	1845	1918																													
Cultra, Health Centre	1849	1922																													
Crawfordsburn, Transport Museum	1928	2002																													
Crawfordsburn, Crawfordsburn Inn	1933																														
North Down, Rathmore Shops	1855	2008																													
North Down, Kilcooley Terminus	1910	1940																													
Bangor, Buscentre	2020																														
<p>Calculate the circumference of the circle.</p>	<p>Claire is at Laganside and wants to go to the Ulster Folk & Transport Museum. She needs to be there by 19:30. What time should she get on the bus?</p>																														



Name: _____

5-a-day

Foundation

<p>9th February</p> <p style="text-align: right;">Corbettmaths </p> <p>Mary wins £400. She gives 50% to her mother. Mary gives 20% to her sister. She keeps the rest.</p> <p style="text-align: right;">Mother £..... Sister £..... Mary £.....</p> <p>Work out how much each person receives.</p> <p style="text-align: right;">Mary £.....</p>																															
<p>Solve $8w + 20 = 4$</p>																															
<table border="1"> <tr> <td>Belfast City Centre, Europa Buscentre</td> <td>1850</td> <td>1930</td> </tr> <tr> <td>Belfast City Centre, Albert Clock Queens Square</td> <td>1820</td> <td>1852</td> </tr> <tr> <td>Belfast City Centre, Laganside Buscentre</td> <td>1832</td> <td>1905</td> </tr> <tr> <td>Holywood, Cedar Grove</td> <td>1845</td> <td>1918</td> </tr> <tr> <td>Cultra, Health Centre</td> <td>1849</td> <td>1922</td> </tr> <tr> <td>Crawfordsburn, Transport Museum</td> <td>1928</td> <td>2002</td> </tr> <tr> <td>Crawfordsburn, Crawfordsburn Inn</td> <td>1933</td> <td></td> </tr> <tr> <td>North Down, Rathmore Shops</td> <td>1855</td> <td>2008</td> </tr> <tr> <td>North Down, Kilcooley Terminus</td> <td>1910</td> <td>1940</td> </tr> <tr> <td>Bangor, Buscentre</td> <td>2020</td> <td></td> </tr> </table> <p>Colin gets on the bus at Europa Buscentre at 18:50. He travels to Crawfordsburn. How long does his journey last?</p>		Belfast City Centre, Europa Buscentre	1850	1930	Belfast City Centre, Albert Clock Queens Square	1820	1852	Belfast City Centre, Laganside Buscentre	1832	1905	Holywood, Cedar Grove	1845	1918	Cultra, Health Centre	1849	1922	Crawfordsburn, Transport Museum	1928	2002	Crawfordsburn, Crawfordsburn Inn	1933		North Down, Rathmore Shops	1855	2008	North Down, Kilcooley Terminus	1910	1940	Bangor, Buscentre	2020	
Belfast City Centre, Europa Buscentre	1850	1930																													
Belfast City Centre, Albert Clock Queens Square	1820	1852																													
Belfast City Centre, Laganside Buscentre	1832	1905																													
Holywood, Cedar Grove	1845	1918																													
Cultra, Health Centre	1849	1922																													
Crawfordsburn, Transport Museum	1928	2002																													
Crawfordsburn, Crawfordsburn Inn	1933																														
North Down, Rathmore Shops	1855	2008																													
North Down, Kilcooley Terminus	1910	1940																													
Bangor, Buscentre	2020																														
<p>Calculate the circumference of the circle.</p>	<p>Claire is at Laganside and wants to go to the Ulster Folk & Transport Museum. She needs to be there by 19:30. What time should she get on the bus?</p>																														

