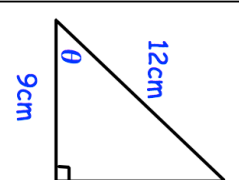
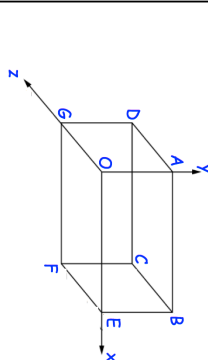
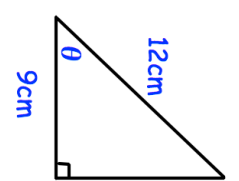
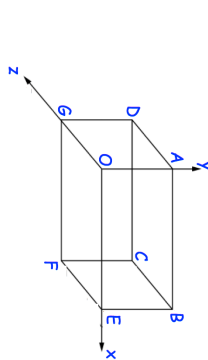


12th February		Corbettmaths										
The table gives information about the number of people voting for each party at an election.	<table border="1"> <thead> <tr> <th>Party</th> <th>Number of Votes</th> </tr> </thead> <tbody> <tr> <td>Gold Party</td> <td>12598</td> </tr> <tr> <td>Pink Party</td> <td>9112</td> </tr> <tr> <td>Brown Party</td> <td>20059</td> </tr> <tr> <td>Purple Party</td> <td>4466</td> </tr> </tbody> </table>	Party	Number of Votes	Gold Party	12598	Pink Party	9112	Brown Party	20059	Purple Party	4466	There are 52852 people who can vote The target was that 88% of people would vote. Was the target met?
Party	Number of Votes											
Gold Party	12598											
Pink Party	9112											
Brown Party	20059											
Purple Party	4466											
Write $\frac{126}{40}$ as a decimal												
	Find the angle θ											
A car was bought for £220000. Its value depreciated by 15% each year for the first three years. What was its value at the end of the three years?												
	This diagram shows a cuboid drawn on a 3D grid. C has coordinates (5, 2, 3). Write down the coordinates of the point A.											

12th February		Corbettmaths										
The table gives information about the number of people voting for each party at an election.	<table border="1"> <thead> <tr> <th>Party</th> <th>Number of Votes</th> </tr> </thead> <tbody> <tr> <td>Gold Party</td> <td>12598</td> </tr> <tr> <td>Pink Party</td> <td>9112</td> </tr> <tr> <td>Brown Party</td> <td>20059</td> </tr> <tr> <td>Purple Party</td> <td>4466</td> </tr> </tbody> </table>	Party	Number of Votes	Gold Party	12598	Pink Party	9112	Brown Party	20059	Purple Party	4466	There are 52852 people who can vote The target was that 88% of people would vote. Was the target met?
Party	Number of Votes											
Gold Party	12598											
Pink Party	9112											
Brown Party	20059											
Purple Party	4466											
Write $\frac{126}{40}$ as a decimal												
	Find the angle θ											
A car was bought for £220000. Its value depreciated by 15% each year for the first three years. What was its value at the end of the three years?												
	This diagram shows a cuboid drawn on a 3D grid. C has coordinates (5, 2, 3). Write down the coordinates of the point A.											