

Name: _____

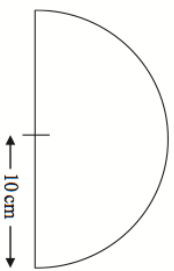
5-a-day

Foundation Plus

14th February



Calculate the perimeter of:



Factorise

$$y^2 - 100$$

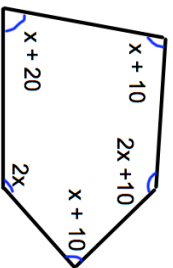
In May 1999, the population of a country was 720,000.

In May 2009, the population was 770,000.

Work out the percentage increase.

Shown is a pentagon.

Form an equation in terms of x



Find the size of each angle.

Name: _____

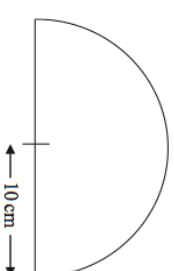
5-a-day

Foundation Plus

14th February



Calculate the perimeter of:



Factorise

$$y^2 - 100$$

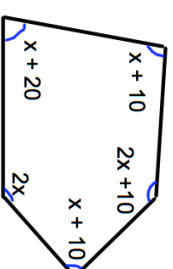
In May 1999, the population of a country was 720,000.

In May 2009, the population was 770,000.

Work out the percentage increase.

Shown is a pentagon.

Form an equation in terms of x



Find the size of each angle.