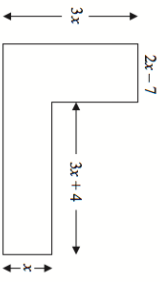
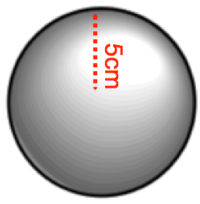
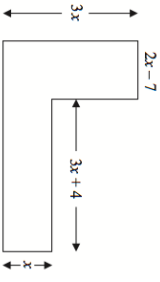
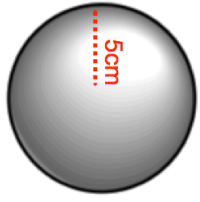


15th February		Corbettmaths								
 <p>Find an expression for the area.</p>										
<p>Solve</p> $5(x - 1) = 4(x + 2) + 2(x - 7)$										
<p>Calculate an estimate of the mean.</p> <table border="1"> <thead> <tr> <th>Time (minutes)</th> <th>Frequency</th> </tr> </thead> <tbody> <tr> <td><math>0 &lt; t \leq 10</math></td> <td>20</td> </tr> <tr> <td><math>10 &lt; t \leq 20</math></td> <td>17</td> </tr> <tr> <td><math>20 &lt; t \leq 30</math></td> <td>12</td> </tr> </tbody> </table>	Time (minutes)	Frequency	$0 < t \leq 10$	20	$10 < t \leq 20$	17	$20 < t \leq 30$	12		
Time (minutes)	Frequency									
$0 < t \leq 10$	20									
$10 < t \leq 20$	17									
$20 < t \leq 30$	12									
<p>Simplify</p> $\frac{5^3 \times 5^4}{5^2}$										
	<p>Calculate the volume of the sphere. Give your answer to 1 decimal place.</p>									

15th February		Corbettmaths								
 <p>Find an expression for the area.</p>										
<p>Solve</p> $5(x - 1) = 4(x + 2) + 2(x - 7)$										
<p>Calculate an estimate of the mean.</p> <table border="1"> <thead> <tr> <th>Time (minutes)</th> <th>Frequency</th> </tr> </thead> <tbody> <tr> <td><math>0 &lt; t \leq 10</math></td> <td>20</td> </tr> <tr> <td><math>10 &lt; t \leq 20</math></td> <td>17</td> </tr> <tr> <td><math>20 &lt; t \leq 30</math></td> <td>12</td> </tr> </tbody> </table>	Time (minutes)	Frequency	$0 < t \leq 10$	20	$10 < t \leq 20$	17	$20 < t \leq 30$	12		
Time (minutes)	Frequency									
$0 < t \leq 10$	20									
$10 < t \leq 20$	17									
$20 < t \leq 30$	12									
<p>Simplify</p> $\frac{5^3 \times 5^4}{5^2}$										
	<p>Calculate the volume of the sphere. Give your answer to 1 decimal place.</p>									