



Name: _____

5-a-day



Foundation Plus

16th February		Corbettmaths 
Solve the inequality $3x - 11 > 16$		
A has coordinates (2, -7) B has coordinates (6, 11) Calculate the coordinates of M, the midpoint of AB.		
Write 5830000 in standard form.	Write sixteen million in standard form.	
	This wheel has a circumference of 1 metre. What is the size of the radius?	
A drink is made from mixing orange juice and lemonade in the ratio 1:4. Lemonade costs £0.80 per litre. Orange juice costs £1.50 per litre.	Work out the cost of 2 litres of the drink.	

Name: _____

5-a-day

Foundation Plus

16th February		Corbettmaths 
Solve the inequality $3x - 11 > 16$		
A has coordinates (2, -7) B has coordinates (6, 11) Calculate the coordinates of M, the midpoint of AB.		
Write 5830000 in standard form.	Write sixteen million in standard form.	
	This wheel has a circumference of 1 metre. What is the size of the radius?	
A drink is made from mixing orange juice and lemonade in the ratio 1:4. Lemonade costs £0.80 per litre. Orange juice costs £1.50 per litre.	Work out the cost of 2 litres of the drink.	