

Name: \_\_\_\_\_

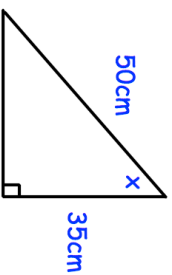
5-a-day

Foundation Plus

19th February



$$4\frac{1}{4} + 2\frac{3}{7}$$



Calculate angle x

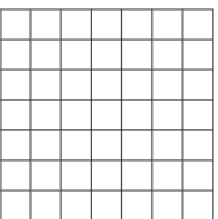
Write 144 as a product of primes.

Find the HCF of 60 and 144.

Calculate the pressure if the area is  $5\text{cm}^2$  and the force is 40N

Draw an arrow to represent the vector

$$\begin{pmatrix} 4 \\ -3 \end{pmatrix}$$



Name: \_\_\_\_\_

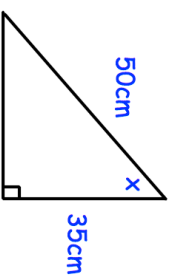
5-a-day

Foundation Plus

19th February



$$4\frac{1}{4} + 2\frac{3}{7}$$



Calculate angle x

Write 144 as a product of primes.

Find the HCF of 60 and 144.

Calculate the pressure if the area is  $5\text{cm}^2$  and the force is 40N

Draw an arrow to represent the vector

$$\begin{pmatrix} 4 \\ -3 \end{pmatrix}$$

