
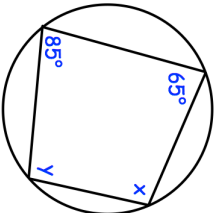

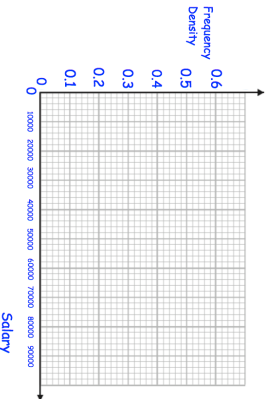

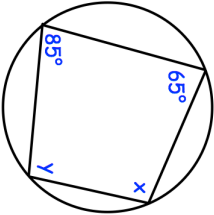

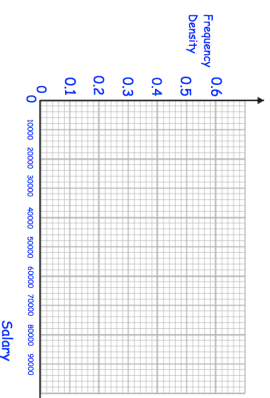


11th February 	Find x and y												
													
Find the volume of a sphere, radius 10cm.													
Solve using the quadratic formula $5x^2 - 10x + 1 = 0$													
<table border="1"> <thead> <tr> <th>Salary, p</th> <th>Frequency</th> </tr> </thead> <tbody> <tr> <td>$0 < p \leq 8000$</td> <td>1200</td> </tr> <tr> <td>$8000 < p \leq 15000$</td> <td>1750</td> </tr> <tr> <td>$15000 < p \leq 25000$</td> <td>4500</td> </tr> <tr> <td>$25000 < p \leq 40000$</td> <td>1500</td> </tr> <tr> <td>$40000 < p \leq 80000$</td> <td>2000</td> </tr> </tbody> </table>	Salary, p	Frequency	$0 < p \leq 8000$	1200	$8000 < p \leq 15000$	1750	$15000 < p \leq 25000$	4500	$25000 < p \leq 40000$	1500	$40000 < p \leq 80000$	2000	
Salary, p	Frequency												
$0 < p \leq 8000$	1200												
$8000 < p \leq 15000$	1750												
$15000 < p \leq 25000$	4500												
$25000 < p \leq 40000$	1500												
$40000 < p \leq 80000$	2000												
Draw a histogram for this data.													

11th February 	Find x and y												
													
Find the volume of a sphere, radius 10cm.													
Solve using the quadratic formula $5x^2 - 10x + 1 = 0$													
<table border="1"> <thead> <tr> <th>Salary, p</th> <th>Frequency</th> </tr> </thead> <tbody> <tr> <td>$0 < p \leq 8000$</td> <td>1200</td> </tr> <tr> <td>$8000 < p \leq 15000$</td> <td>1750</td> </tr> <tr> <td>$15000 < p \leq 25000$</td> <td>4500</td> </tr> <tr> <td>$25000 < p \leq 40000$</td> <td>1500</td> </tr> <tr> <td>$40000 < p \leq 80000$</td> <td>2000</td> </tr> </tbody> </table>	Salary, p	Frequency	$0 < p \leq 8000$	1200	$8000 < p \leq 15000$	1750	$15000 < p \leq 25000$	4500	$25000 < p \leq 40000$	1500	$40000 < p \leq 80000$	2000	
Salary, p	Frequency												
$0 < p \leq 8000$	1200												
$8000 < p \leq 15000$	1750												
$15000 < p \leq 25000$	4500												
$25000 < p \leq 40000$	1500												
$40000 < p \leq 80000$	2000												
Draw a histogram for this data.													