
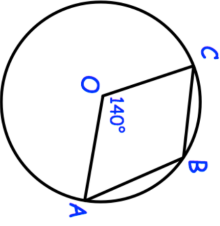



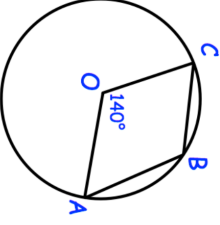




18th February	Corbettmaths 
A bag of apples weighs 5kg, correct to the nearest kilogram. What is the greatest possible weight of four bags?	
Find angle ABC	
<p>4cm  6cm </p> <p>Above are two similar parallelograms.</p>	The area of parallelogram A is 28cm^2 Work out the area of parallelogram B.
James is a student of a class of 16 students, 5 of which wear glasses. 1197 students attend the school. Use this information to estimate how many students in the school wear glasses.	
A different bag contains 4 red apples and 6 green apples. Three apples are taken from the bag, one at a time, with replacement. What is the probability of three red apples?	

18th February	Corbettmaths 
A bag of apples weighs 5kg, correct to the nearest kilogram. What is the greatest possible weight of four bags?	
Find angle ABC	
<p>4cm  6cm </p> <p>Above are two similar parallelograms.</p>	The area of parallelogram A is 28cm^2 Work out the area of parallelogram B.
James is a student of a class of 16 students, 5 of which wear glasses. 1197 students attend the school. Use this information to estimate how many students in the school wear glasses.	
A different bag contains 4 red apples and 6 green apples. Three apples are taken from the bag, one at a time, with replacement. What is the probability of three red apples?	