
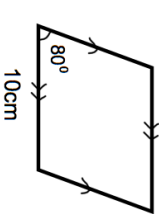



22nd February	Corbettmaths
$\sqrt{7} \times \sqrt{2}$	Work out $(\sqrt{3})^2$
A sphere of diameter 4cm is cut from a cube with side length 4cm. What percentage of the cube is wasted?	
A company employs 200 people. 25% of the employees earn under £24,000. 50% of the employees earn over £36,000. The interquartile range of the earnings is £7,000. The person who earns the most is paid £61,000. The range of the earnings is £50,000.	Draw a box plot to show this information
Make m the subject of $m(r + p) = r(h - m)$	Shown is a rhombus of side length 10cm. Calculate its area.
	

22nd February	Corbettmaths
$\sqrt{7} \times \sqrt{2}$	Work out $(\sqrt{3})^2$
A sphere of diameter 4cm is cut from a cube with side length 4cm. What percentage of the cube is wasted?	
A company employs 200 people. 25% of the employees earn under £24,000. 50% of the employees earn over £36,000. The interquartile range of the earnings is £7,000. The person who earns the most is paid £61,000. The range of the earnings is £50,000.	Draw a box plot to show this information
Make m the subject of $m(r + p) = r(h - m)$	Shown is a rhombus of side length 10cm. Calculate its area.
