







28th February	 Corbettmaths
Calculate the distance between (1, 3) and (4, 10). Leave your answer as a surd	
Simplify $\sqrt{75}$	
Solve, giving your answers to one decimal place. $x^2 + 7x = 20$	
<div style="display: flex; justify-content: space-around; align-items: center;"> <div style="text-align: center;">  <p>A 6cm</p> </div> <div style="text-align: center;">  <p>B 12cm</p> </div> </div>	Cuboid A and cuboid B are similar. The surface area of cuboid B is 1800cm ² . Work out the surface area of cuboid A.
Work out $1\frac{2}{3} + 2\frac{1}{4} \times \frac{7}{15}$	

28th February	 Corbettmaths
Calculate the distance between (1, 3) and (4, 10). Leave your answer as a surd	
Simplify $\sqrt{75}$	
Solve, giving your answers to one decimal place. $x^2 + 7x = 20$	
<div style="display: flex; justify-content: space-around; align-items: center;"> <div style="text-align: center;">  <p>A 6cm</p> </div> <div style="text-align: center;">  <p>B 12cm</p> </div> </div>	Cuboid A and cuboid B are similar. The surface area of cuboid B is 1800cm ² . Work out the surface area of cuboid A.
Work out $1\frac{2}{3} + 2\frac{1}{4} \times \frac{7}{15}$	