
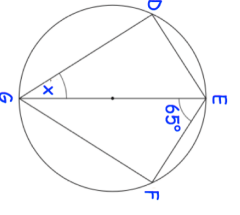

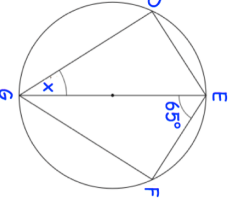


29th February		 Corbettmaths
Write 0.55555... as a fraction		
Simplify $\sqrt{11} \times \sqrt{6}$	Simplify $(\sqrt{7})^2$	
Write down the exact value of $4\sin 30$	Write down the exact value of $10\sin 60$	
 <p>The points A(-2, -5) and C(13, 15) are points on the straight line ABC. AB:BC = 3:2. Work out the coordinates of B</p>	EG is a diameter. DEFG is a kite. Work out the value of x.	

29th February		 Corbettmaths
Write 0.55555... as a fraction		
Simplify $\sqrt{11} \times \sqrt{6}$	Simplify $(\sqrt{7})^2$	
Write down the exact value of $4\sin 30$	Write down the exact value of $10\sin 60$	
 <p>The points A(-2, -5) and C(13, 15) are points on the straight line ABC. AB:BC = 3:2. Work out the coordinates of B</p>	EG is a diameter. DEFG is a kite. Work out the value of x.	