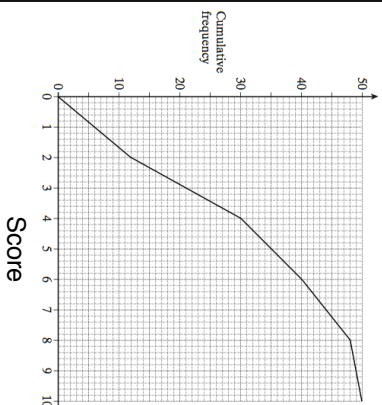
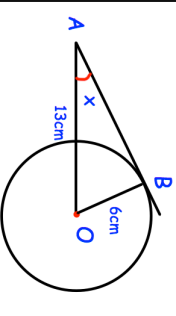
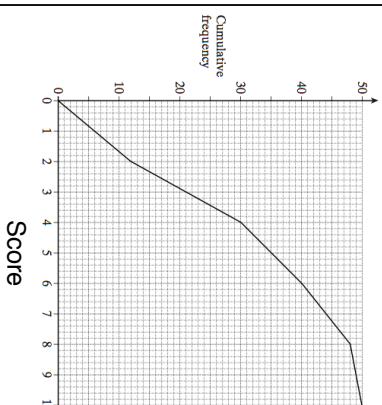
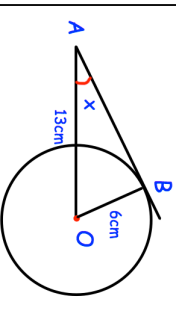


8th February		Corbettmaths	
	<p>Shown are the scores of 50 students.</p> <p>Work out an estimate of the median</p>	<p>Work out an estimate of the interquartile range.</p>	<p>Write down the gradient of the line.</p>
	<p>The equation of a straight line is</p> $y = 5x + 2$		
<p>Another line is perpendicular to the line above.</p> <p>What is the gradient of the perpendicular line?</p>			
	<p>AB is a tangent.</p> <p>Find x.</p>		

8th February		Corbettmaths	
	<p>Shown are the scores of 50 students.</p> <p>Work out an estimate of the median</p>	<p>Work out an estimate of the interquartile range.</p>	<p>Write down the gradient of the line.</p>
	<p>The equation of a straight line is</p> $y = 5x + 2$		
<p>Another line is perpendicular to the line above.</p> <p>What is the gradient of the perpendicular line?</p>			
	<p>AB is a tangent.</p> <p>Find x.</p>		