
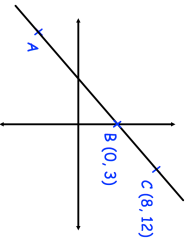

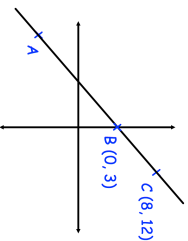


<b>9th February</b>	 Corbettmaths
<p>A water tank springs a leak (at the base) and loses 8% of its water every minute.</p> <p>What percentage of water is lost over 5 minutes?</p>	
<p>Simplify <math>\sqrt[4]{48}</math></p>	
	<p>AB:BC is 5:2</p> <p>Find the coordinates of point A</p>
<p>Convert <b>0.34</b> to a fraction.</p> <p>Give your answer in its simplest form.</p>	
<p><math>(ax + 1)(x - 3)(x + b) = 2x^3 - 3x^2 - 8x - 3</math></p> <p>Find a and b</p>	

<b>9th February</b>	 Corbettmaths
<p>A water tank springs a leak (at the base) and loses 8% of its water every minute.</p> <p>What percentage of water is lost over 5 minutes?</p>	
<p>Simplify <math>\sqrt[4]{48}</math></p>	
	<p>AB:BC is 5:2</p> <p>Find the coordinates of point A</p>
<p>Convert <b>0.34</b> to a fraction.</p> <p>Give your answer in its simplest form.</p>	
<p><math>(ax + 1)(x - 3)(x + b) = 2x^3 - 3x^2 - 8x - 3</math></p> <p>Find a and b</p>	