
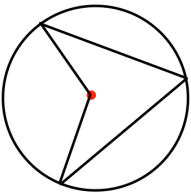

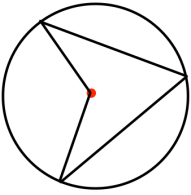


12th February  Corbettmaths	
Make a the subject $\frac{1}{a} - \frac{1}{b} = \frac{1}{c}$	
Solve $x^2 - 4x - 11 = 0$ using completing the square.	
Here are the first 5 terms of a quadratic sequence 9 17 29 45 65 Find an expression, in terms of n , for the n th term of this quadratic sequence.	
	Prove that the angle at the centre is twice the angle at the circumference.
The minimum point of a quadratic graph in the form $y = x^2 + ax + b$ is (6, 3). Find a and b .	

12th February  Corbettmaths	
Make a the subject $\frac{1}{a} - \frac{1}{b} = \frac{1}{c}$	
Solve $x^2 - 4x - 11 = 0$ using completing the square.	
Here are the first 5 terms of a quadratic sequence 9 17 29 45 65 Find an expression, in terms of n , for the n th term of this quadratic sequence.	
	Prove that the angle at the centre is twice the angle at the circumference.
The minimum point of a quadratic graph in the form $y = x^2 + ax + b$ is (6, 3). Find a and b .	