
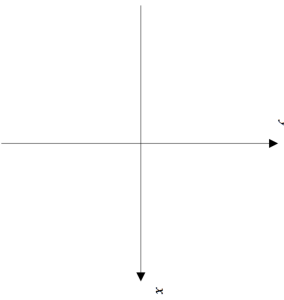
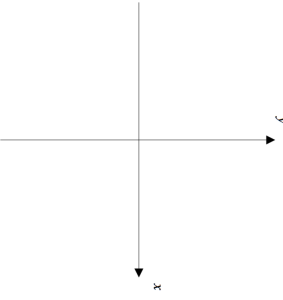
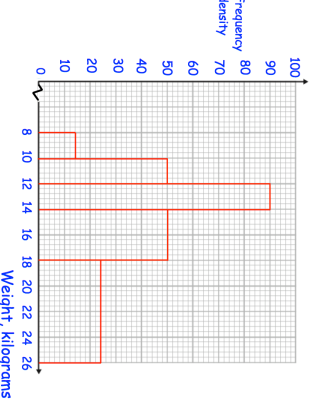

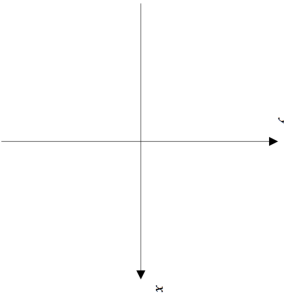
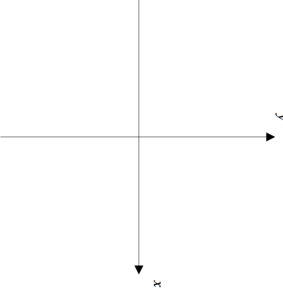
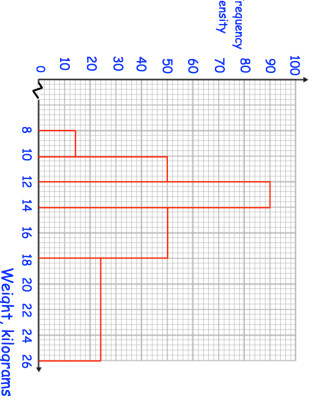


13th February	Corbettmaths 
<p>4 blue socks and 6 black socks are in a drawer. Keith takes out two socks at random. Work out the probability that Keith takes out two socks are different colours.</p>	
<p>Sketch <math>y = \frac{1}{x}</math></p> 	<p>Sketch <math>y = 4^x</math></p> 
<p>The histogram shows the weights of 700 dogs.</p> 	<p>Calculate an estimate of the median.</p> <hr/> <p>Calculate an estimate of the mean.</p>

13th February	Corbettmaths 
<p>4 blue socks and 6 black socks are in a drawer. Keith takes out two socks at random. Work out the probability that Keith takes out two socks are different colours.</p>	
<p>Sketch <math>y = \frac{1}{x}</math></p> 	<p>Sketch <math>y = 4^x</math></p> 
<p>The histogram shows the weights of 700 dogs.</p> 	<p>Calculate an estimate of the median.</p> <hr/> <p>Calculate an estimate of the mean.</p>