
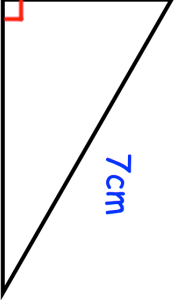
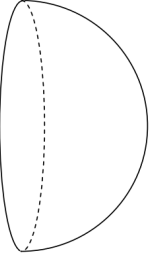

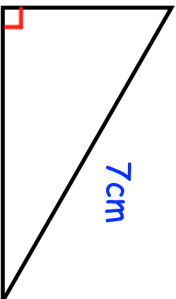
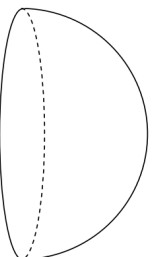


6th February		Corbettmaths 
Write down the exact value of: $\tan 0^\circ$	Write down the exact value of: $\tan 60^\circ$	
	Find the area of the triangle. Give your answer in surd form and as simply as possible	
Given $f(x) = 2x + 3$ $g(x) = 4x^2$	Find $fg(x)$	
<input type="checkbox"/> P <input type="checkbox"/> O <input type="checkbox"/> L <input type="checkbox"/> Y <input type="checkbox"/> 6 <input type="checkbox"/> O <input type="checkbox"/> N	Work out the probability that both cards are O.	
A tile is selected at random, it is not replaced and then another tile is selected.		
	The solid hemisphere shown has a radius of 3cm. The hemisphere is made from a material with density 6.13g/cm ³ . Calculate the mass of the hemisphere.	

6th February		Corbettmaths 
Write down the exact value of: $\tan 0^\circ$	Write down the exact value of: $\tan 60^\circ$	
	Find the area of the triangle. Give your answer in surd form and as simply as possible	
Given $f(x) = 2x + 3$ $g(x) = 4x^2$	Find $fg(x)$	
<input type="checkbox"/> P <input type="checkbox"/> O <input type="checkbox"/> L <input type="checkbox"/> Y <input type="checkbox"/> 6 <input type="checkbox"/> O <input type="checkbox"/> N	Work out the probability that both cards are O.	
A tile is selected at random, it is not replaced and then another tile is selected.		
	The solid hemisphere shown has a radius of 3cm. The hemisphere is made from a material with density 6.13g/cm ³ . Calculate the mass of the hemisphere.	