
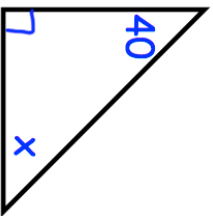
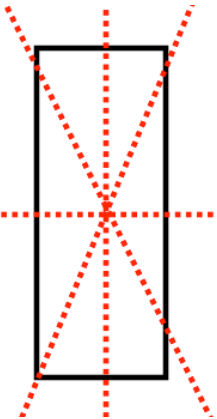

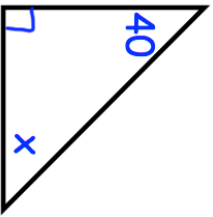


11th February  Corbettmaths	
Hannah says 5 squared is equal to 10. Explain why she is wrong	
Martin says 23×12 is equal to 206 because $20 \times 10 = 200$ and $3 \times 2 = 6$. Explain why he is wrong	
 Nicola says a rectangle has 4 lines of symmetry. Explain why she is wrong	David says angle x is 140 degrees. Explain why he is wrong
Mr Smith collects stamps and had 4512 in his collection. His friend Ian gives him 568 more stamps. His friend David gives him some more. He has now got 6000 stamps.	How many stamps did David give Mr Smith? 

11th February  Corbettmaths	
Hannah says 5 squared is equal to 10. Explain why she is wrong	
Martin says 23×12 is equal to 206 because $20 \times 10 = 200$ and $3 \times 2 = 6$. Explain why he is wrong	
 Nicola says a rectangle has 4 lines of symmetry. Explain why she is wrong	David says angle x is 140 degrees. Explain why he is wrong
Mr Smith collects stamps and had 4512 in his collection. His friend Ian gives him 568 more stamps. His friend David gives him some more. He has now got 6000 stamps.	How many stamps did David give Mr Smith? 