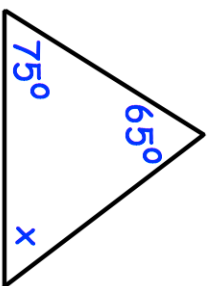




17th February

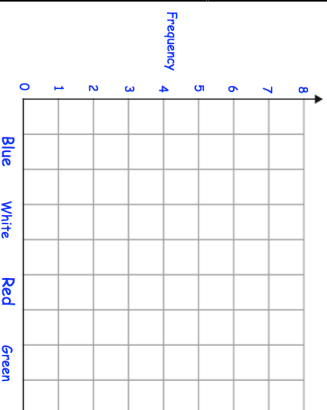


James asked his friends their favourite colour.

Red Blue Green White Blue Blue Red
Green White Red Red Red Blue Red
Green White Red

Complete the bar chart (include a title)

Colour	Tally	Frequency
Blue		
White		
Red		
Green		

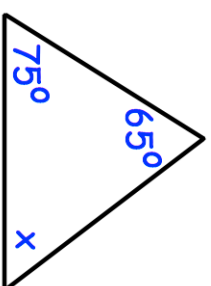


Write 0.6 as a fraction.
Give your answer in its simplest form

Work out 126×72



17th February

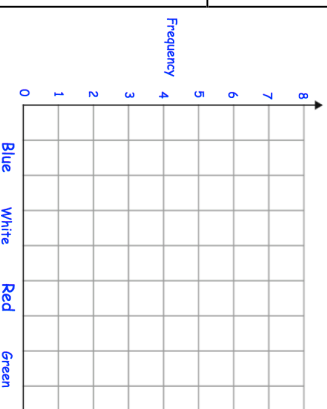


James asked his friends their favourite colour.

Red Blue Green White Blue Blue Red
Green White Red Red Red Blue Red
Green White Red

Complete the bar chart (include a title)

Colour	Tally	Frequency
Blue		
White		
Red		
Green		



Write 0.6 as a fraction.
Give your answer in its simplest form

Work out 126×72