
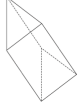




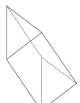





2nd February		Corbettmaths									
Match each solid to the correct name	 Sphere  Triangular Prism  Square-based Pyramid  Cube										
Add together 393 and 1928											
Is Harry correct? Explain your answer	 <p>18% is greater than 0.2</p>										
<table border="1"> <thead> <tr> <th>Monday</th> <th>Tuesday</th> <th>Wednesday</th> <th>Thursday</th> </tr> </thead> <tbody> <tr> <td>-3°C</td> <td>-1°C</td> <td>-6°C</td> <td>0°C</td> </tr> </tbody> </table> <p>On what day was the lowest temperature?</p>	Monday	Tuesday	Wednesday	Thursday	-3°C	-1°C	-6°C	0°C			
Monday	Tuesday	Wednesday	Thursday								
-3°C	-1°C	-6°C	0°C								
Find a multiple of 4 and a multiple of 5, that add to make a multiple of 6.											

2nd February		Corbettmaths									
Match each solid to the correct name	 Sphere  Triangular Prism  Square-based Pyramid  Cube										
Add together 393 and 1928											
Is Harry correct? Explain your answer	 <p>18% is greater than 0.2</p>										
<table border="1"> <thead> <tr> <th>Monday</th> <th>Tuesday</th> <th>Wednesday</th> <th>Thursday</th> </tr> </thead> <tbody> <tr> <td>-3°C</td> <td>-1°C</td> <td>-6°C</td> <td>0°C</td> </tr> </tbody> </table> <p>On what day was the lowest temperature?</p>	Monday	Tuesday	Wednesday	Thursday	-3°C	-1°C	-6°C	0°C			
Monday	Tuesday	Wednesday	Thursday								
-3°C	-1°C	-6°C	0°C								
Find a multiple of 4 and a multiple of 5, that add to make a multiple of 6.											