
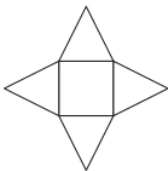

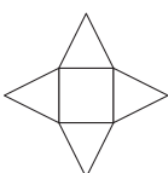


20th February	Sketch the net for a Cube  Corbettmaths
 <p>What solid is this the net for?</p>	
Chair £65 Sofa £149 Table £210 Bruno buys a table, a sofa and two chairs. Work out the total cost of the items he buys.	
$\frac{2}{4}$ $\frac{3}{7}$ $\frac{5}{9}$ $\frac{9}{18}$ $\frac{10}{22}$	Which two fractions are equivalent to $\frac{1}{2}$
Write down the number that is 2 more than -8	
$1900 \div \square = 19$	

20th February	Sketch the net for a Cube  Corbettmaths
 <p>What solid is this the net for?</p>	
Chair £65 Sofa £149 Table £210 Bruno buys a table, a sofa and two chairs. Work out the total cost of the items he buys.	
$\frac{2}{4}$ $\frac{3}{7}$ $\frac{5}{9}$ $\frac{9}{18}$ $\frac{10}{22}$	Which two fractions are equivalent to $\frac{1}{2}$
Write down the number that is 2 more than -8	
$1900 \div \square = 19$	