













21st February		Corbettmaths 	
	Right-angled triangle	Match each triangle to the correct name	
	Equilateral triangle		
	Scalene triangle		
	Isosceles triangle	Draw a parallelogram	
Match each equivalent decimal and percentage.		Decimal	Percentage
		0.05	50%
		0.25	20%
		0.2	25%
		0.5	5%
Calculate the area of the rectangle			
27cm			
			
14cm			
Work out	Work out		
$\frac{2}{5}$ of 35 days	$\frac{4}{9}$ of 72kg		

21st February		Corbettmaths 	
	Right-angled triangle	Match each triangle to the correct name	
	Equilateral triangle		
	Scalene triangle		
	Isosceles triangle	Draw a parallelogram	
Match each equivalent decimal and percentage.		Decimal	Percentage
		0.05	50%
		0.25	20%
		0.2	25%
		0.5	5%
Calculate the area of the rectangle			
27cm			
			
14cm			
Work out	Work out		
$\frac{2}{5}$ of 35 days	$\frac{4}{9}$ of 72kg		