





Name: \_\_\_\_\_

5-a-day





Numeracy

<b>23rd February</b>		
Write the number 1906 in words.	Write the number <b>twenty thousand, three hundred and twenty nine</b> in figures.	
Write the number 1906 to the nearest ten.	Write the number 38 627 to the nearest thousand.	
Write $\frac{3}{4}$ as a decimal.		
Write 2 metres in centimetres	Write 3.4 metres in centimetres	
 Pattern 1  Pattern 2  Pattern 3	Draw Pattern 4	

Name: \_\_\_\_\_

5-a-day

Numeracy

<b>23rd February</b>		
Write the number 1906 in words.	Write the number <b>twenty thousand, three hundred and twenty nine</b> in figures.	
Write the number 1906 to the nearest ten.	Write the number 38 627 to the nearest thousand.	
Write $\frac{3}{4}$ as a decimal.		
Write 2 metres in centimetres	Write 3.4 metres in centimetres	
 Pattern 1  Pattern 2  Pattern 3	Draw Pattern 4	