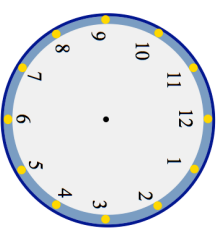


Name: \_\_\_\_\_

5-a-day

Numeracy

**26th February**



Show the time 7:45 on the clock

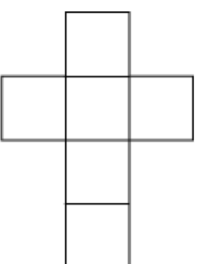
Add together 155 and 418

Subtract 183 from 824

Multiply 58 by 3

Divide 720 by 5

The diagram shows the net of a 3D shape.



What is the name of the 3D shape?

George is paid £8 an hour.  
He works 26 hours in a week.

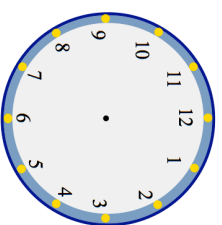
How much money will George be paid?

Name: \_\_\_\_\_

5-a-day

Numeracy

**26th February**



Show the time 7:45 on the clock

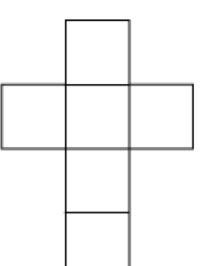
Add together 155 and 418

Subtract 183 from 824

Multiply 58 by 3

Divide 720 by 5

The diagram shows the net of a 3D shape.



What is the name of the 3D shape?

George is paid £8 an hour.  
He works 26 hours in a week.

How much money will George be paid?