

Name: _____

5-a-day

Numeracy



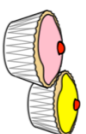
27th February

Work out 50% of 60cm

Work out 25% of 80cm

Corbettmaths

Gianluca, James and Henry are organising a charity cake sale. They want to make 54 cupcakes in total.



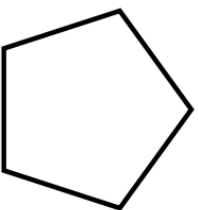
How many cupcakes should each boy make?

At a football match between City and Rovers, there were 4486 fans.

Write 4486 to the nearest thousand.

In the match report, 4486 was rounded to the nearest thousand.

Measure the perimeter of the pentagon



Simplify

$$\frac{27}{30}$$

Name: _____

5-a-day

Numeracy



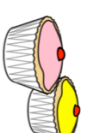
27th February

Work out 50% of 60cm

Work out 25% of 80cm

Corbettmaths

Gianluca, James and Henry are organising a charity cake sale. They want to make 54 cupcakes in total.



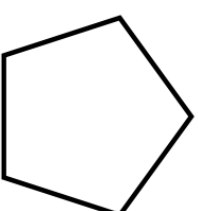
How many cupcakes should each boy make?

At a football match between City and Rovers, there were 4486 fans.

Write 4486 to the nearest thousand.

In the match report, 4486 was rounded to the nearest thousand.

Measure the perimeter of the pentagon



Simplify

$$\frac{27}{30}$$