
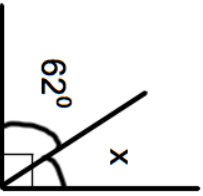

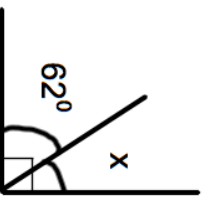


| | |
|--|--|
| 5th February 473 x 10 |  Corbettmaths |
| Write down the value of the 7 in the answer. | |
| Here are four different digits. 8 1 5 6 Put one digit in each box to make the smallest total. You may only use each digit once. | <div style="display: flex; justify-content: space-around; align-items: center;"> <input style="width: 40px; height: 30px; border: 1px solid black;" type="text"/> + <input style="width: 40px; height: 30px; border: 1px solid black;" type="text"/> + <input style="width: 40px; height: 30px; border: 1px solid black;" type="text"/> + <input style="width: 40px; height: 30px; border: 1px solid black;" type="text"/> </div> Write down the total _____ |
| Put one digit in each box to make the largest total. | <div style="display: flex; justify-content: space-around; align-items: center;"> <input style="width: 40px; height: 30px; border: 1px solid black;" type="text"/> + <input style="width: 40px; height: 30px; border: 1px solid black;" type="text"/> + <input style="width: 40px; height: 30px; border: 1px solid black;" type="text"/> + <input style="width: 40px; height: 30px; border: 1px solid black;" type="text"/> </div> Write down the total _____ |
|  | Find the size of x |
| Write the following numbers in order of size. Start with the smallest number. 0.6 0.17 0.103 0.77 0.5 | |

| | |
|--|--|
| 5th February 473 x 10 |  Corbettmaths |
| Write down the value of the 7 in the answer. | |
| Here are four different digits. 8 1 5 6 Put one digit in each box to make the smallest total. You may only use each digit once. | <div style="display: flex; justify-content: space-around; align-items: center;"> <input style="width: 40px; height: 30px; border: 1px solid black;" type="text"/> + <input style="width: 40px; height: 30px; border: 1px solid black;" type="text"/> + <input style="width: 40px; height: 30px; border: 1px solid black;" type="text"/> + <input style="width: 40px; height: 30px; border: 1px solid black;" type="text"/> </div> Write down the total _____ |
| Put one digit in each box to make the largest total. | <div style="display: flex; justify-content: space-around; align-items: center;"> <input style="width: 40px; height: 30px; border: 1px solid black;" type="text"/> + <input style="width: 40px; height: 30px; border: 1px solid black;" type="text"/> + <input style="width: 40px; height: 30px; border: 1px solid black;" type="text"/> + <input style="width: 40px; height: 30px; border: 1px solid black;" type="text"/> </div> Write down the total _____ |
|  | Find the size of x |
| Write the following numbers in order of size. Start with the smallest number. 0.6 0.17 0.103 0.77 0.5 | |