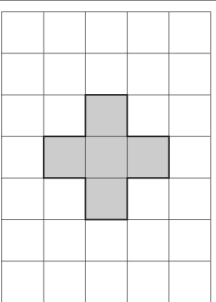


Name: _____

5-a-day

Numeracy

7th February



Area: _____

Perimeter: _____

Write down a suitable metric unit to measure:

a) The length of a pencil

b) The amount of juice in a glass

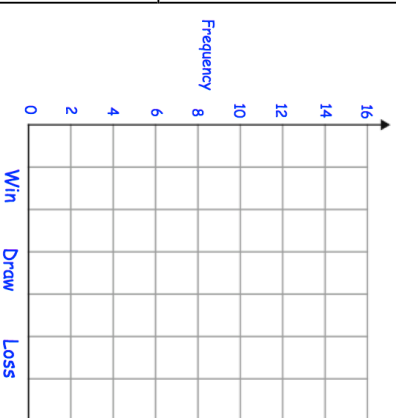
c) The distance between Cardiff and Swansea

Cardiff City has played some games. They have the following results

Win: 12
Draw: 3
Loss: 2

Work out 50% of 32

$23 \div 100$



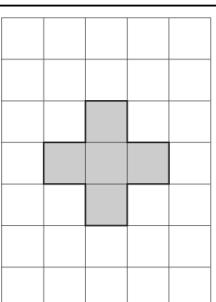
$48100 \div 1000$

Name: _____

5-a-day

Numeracy

7th February



Area: _____

Perimeter: _____

Write down a suitable metric unit to measure:

a) The length of a pencil

b) The amount of juice in a glass

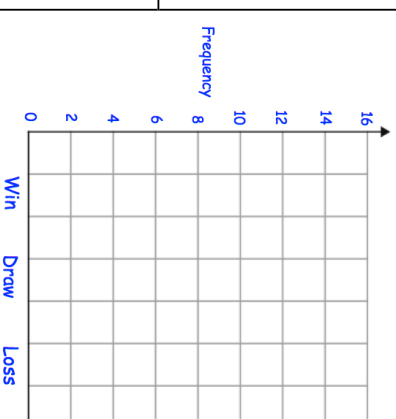
c) The distance between Cardiff and Swansea

Cardiff City has played some games. They have the following results

Win: 12
Draw: 3
Loss: 2

Work out 50% of 32

$23 \div 100$



$48100 \div 1000$