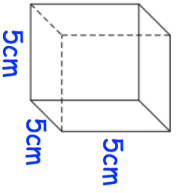

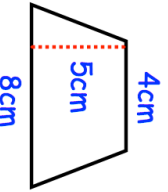


Name: \_\_\_\_\_

5-a-day

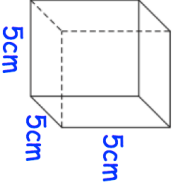

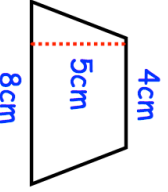
Foundation

<p><b>1st January</b></p> <p style="text-align: right;">Corbettmaths</p>	
	<p>Work out the volume of the cube. State the units of your answer.</p>
	<p>What type of correlation is shown?</p>
$\frac{3}{4} - \frac{1}{3}$	$\frac{3}{4} + \frac{4}{7}$
<p>Jam is made from sugar and strawberries in the ratio 3:5. A jar contains 150g of sugar.</p>	<p>How many grams of strawberries are in the jar? How many grams of jam are in the jar?</p>
	<p>Calculate the area of the trapezium</p>

Name: \_\_\_\_\_

5-a-day

Foundation

<p><b>1st January</b></p> <p style="text-align: right;">Corbettmaths</p>	
	<p>Work out the volume of the cube. State the units of your answer.</p>
	<p>What type of correlation is shown?</p>
$\frac{3}{4} - \frac{1}{3}$	$\frac{3}{4} + \frac{4}{7}$
<p>Jam is made from sugar and strawberries in the ratio 3:5. A jar contains 150g of sugar.</p>	<p>How many grams of strawberries are in the jar? How many grams of jam are in the jar?</p>
	<p>Calculate the area of the trapezium</p>