
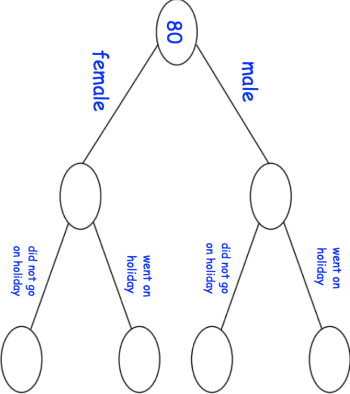



<b>14th January</b>	 Corbettmaths
Write $\frac{21}{5}$ as a mixed number.	Write $1\frac{2}{3}$ as a top heavy fraction.
Jonah wants to draw a pie chart <b>Sunderland City 6</b> <b>Manchester Rovers 7</b> <b>Liverpool United 13</b> <b>London Town 10</b>	Calculate the size of each angle.
Mr James gives £500 to his children Ally, Barry and Cat in the ratio 2:3:5.  How much do they each receive?	
A school has 80 teachers.  44 of the teachers are female 11 of the male teachers went on holiday 20 of the female teachers did not go on holiday.  Complete the frequency tree	

<b>14th January</b>	 Corbettmaths
Write $\frac{21}{5}$ as a mixed number.	Write $1\frac{2}{3}$ as a top heavy fraction.
Jonah wants to draw a pie chart <b>Sunderland City 6</b> <b>Manchester Rovers 7</b> <b>Liverpool United 13</b> <b>London Town 10</b>	Calculate the size of each angle.
Mr James gives £500 to his children Ally, Barry and Cat in the ratio 2:3:5.  How much do they each receive?	
A school has 80 teachers.  44 of the teachers are female 11 of the male teachers went on holiday 20 of the female teachers did not go on holiday.  Complete the frequency tree	