

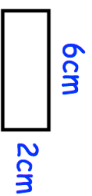
Name: _____

5-a-day

Foundation

2nd January

Write 50cm as a fraction of 2m
Give your answer in its simplest form



Four rectangles identical to the one above are arranged.



What is the perimeter?

Find the highest common factor of 30 and 18

James has 5 cards, each with a number written on it.

Write down a possible set of numbers James could have.

The median is 5
The mode is 3
The range is 8
All numbers are odd.

The ratio of boys to girls in year 7 is 2:3

There are 40 boys in year 7, how many girls are there?

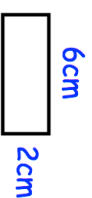
Name: _____

5-a-day

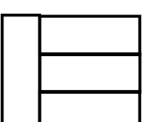
Foundation

2nd January

Write 50cm as a fraction of 2m
Give your answer in its simplest form



Four rectangles identical to the one above are arranged.



What is the perimeter?

Find the highest common factor of 30 and 18

James has 5 cards, each with a number written on it.

Write down a possible set of numbers James could have.

The median is 5
The mode is 3
The range is 8
All numbers are odd.

The ratio of boys to girls in year 7 is 2:3

There are 40 boys in year 7, how many girls are there?