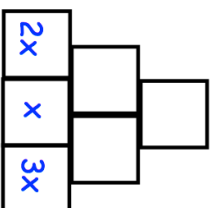


21st January

The contents of each box can be found by adding the two boxes directly beneath it.



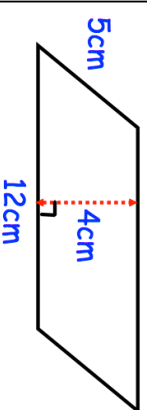
Share £1200 in the ratio 2:3

Complete the table

	Exactly 1 line of symmetry	Rotational symmetry of order 2
Rectangle	X	✓
Square		
Kite		
Rhombus		

Barry earns £1300 a month. He spends 30% of this money on rent and 12% on bills.

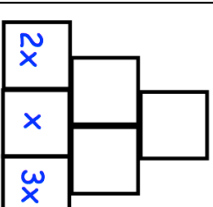
How much of the £1300 has he left?



Calculate the area of this parallelogram.

21st January

The contents of each box can be found by adding the two boxes directly beneath it.



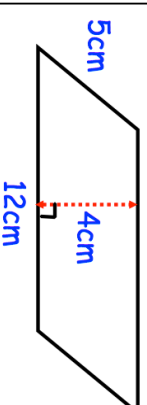
Share £1200 in the ratio 2:3

Complete the table

	Exactly 1 line of symmetry	Rotational symmetry of order 2
Rectangle	X	✓
Square		
Kite		
Rhombus		

Barry earns £1300 a month. He spends 30% of this money on rent and 12% on bills.

How much of the £1300 has he left?



Calculate the area of this parallelogram.