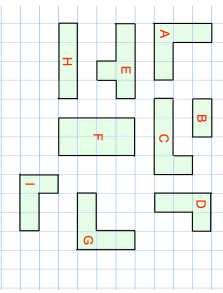
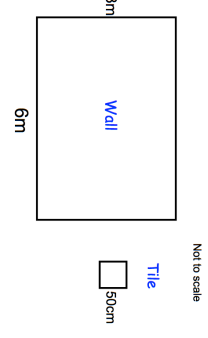
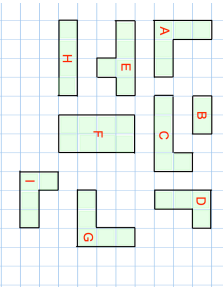
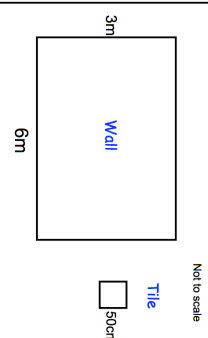


22nd January		Corbettmaths
<p>Find a shape that is mathematically similar to B</p> 	<p>Find a shape that is mathematically similar to B</p>	
Express 20p as a fraction of £5	Write 0.065 as a fraction	
<p>There are only blue and red sweets in a bag. The ratio of blue sweets to red sweets is 5:3</p> <p>What fraction of the sweets are red?</p>		
<p>Fiona drives for 4 hours. Her average speed is 25.5 mph.</p> <p>How far does Fiona drive?</p>	<p>Not to scale</p> 	
<p>Mollie is tiling her bathroom wall. The wall is 6m by 3m. Each square tile is 50cm by 50cm. Each tile cost £4.</p> <p>Calculate the cost of tiling the wall.</p>		

22nd January		Corbettmaths
<p>Find a shape that is mathematically similar to B</p> 	<p>Find a shape that is mathematically similar to B</p>	
Express 20p as a fraction of £5	Write 0.065 as a fraction	
<p>There are only blue and red sweets in a bag. The ratio of blue sweets to red sweets is 5:3</p> <p>What fraction of the sweets are red?</p>		
<p>Fiona drives for 4 hours. Her average speed is 25.5 mph.</p> <p>How far does Fiona drive?</p>	<p>Not to scale</p> 	
<p>Mollie is tiling her bathroom wall. The wall is 6m by 3m. Each square tile is 50cm by 50cm. Each tile cost £4.</p> <p>Calculate the cost of tiling the wall.</p>		